

# The Number 9

The Number

9

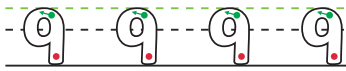
Activity Pack

Make an oval and a line.


Now I've made the number 9.



Carefully write out two lines of the number 9.



How many snails?



What time is on the watch?

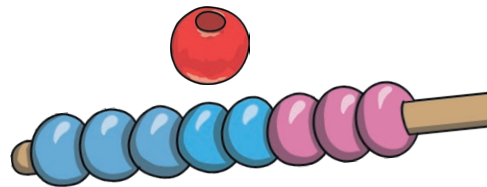


one less



There are 8 beads on the string and 1 on the table.

Write how many beads there are altogether.



Here are some balloons. If 1 of the balloons popped, how many would be left?

